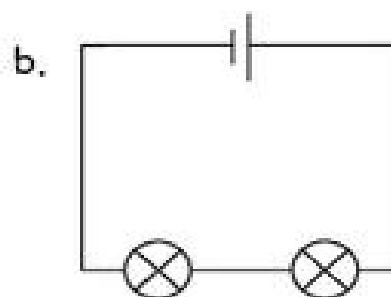
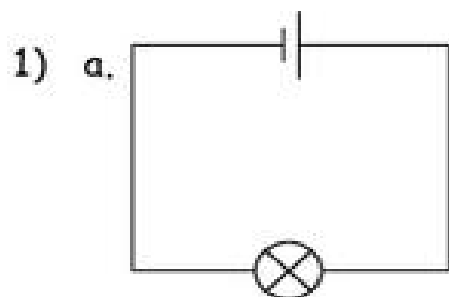


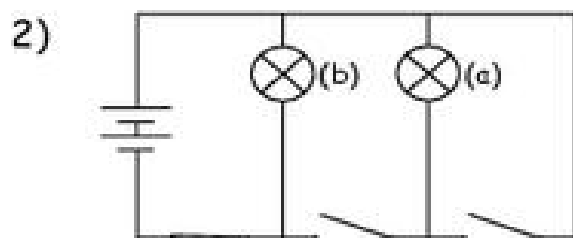
Name: _____

Date: _____

Look at the circuits below and answer the questions:

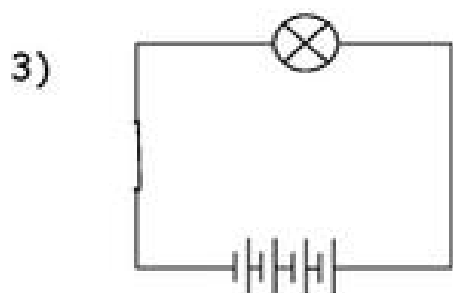


Which diagram would produce the brightest bulb? _____



Which bulb in this circuit would light up? _____

Why would the other bulb not light up?



What would happen to the bulb in this circuit? _____

Name: _____

Date: _____

Look at the circuits below. Write 'will work' or 'won't work' and give a reason why for each circuit:

